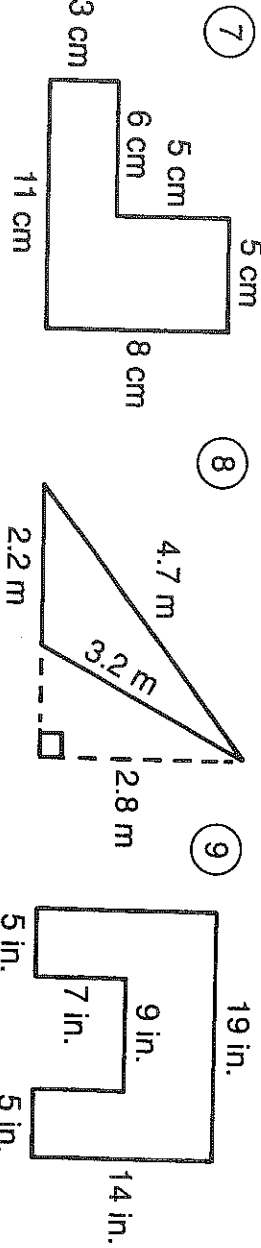
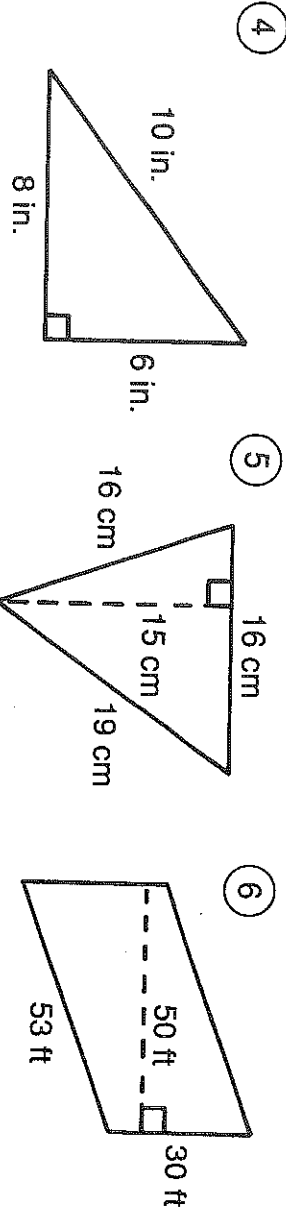
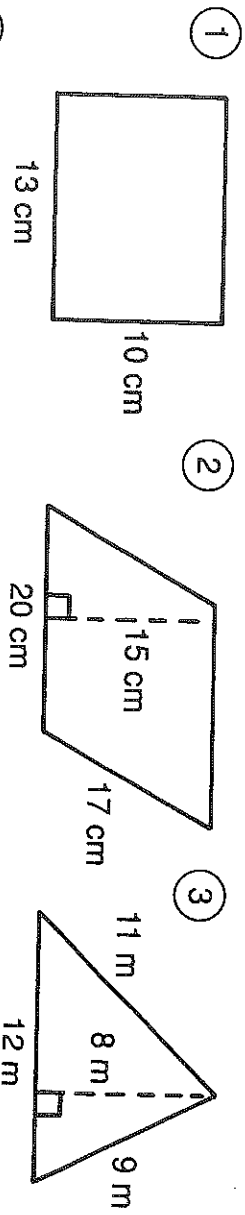


H.W.

Why Was Igor Unhappy About His Spelling Test Even Though He Got Everything Right?

Give both the perimeter and area of each figure. Find each answer in the appropriate answer column. Fill in the correct unit of measure for each answer you choose, then circle the number-letter next to it. Write the letter in the matching numbered box at the bottom of the page.



- ⑩ Rectangle with sides of 22 cm and 28 cm.
- ⑪ Square with sides measuring 12 in.
- ⑫ Right triangle with sides of 8 m, 15 m and 17 m.

	Perimeters	Areas
95	21-S	58 13-L
24	17-E	34 24-A
67	18-S	300 6-S
10.1	8-E	60 21-H
46	12-L	136 4-R
152	16-R	3.08 29-S
100	25-W	64 11-O
38	20-T	24 26-O
32	1-H	144 27-R
40	4-M	3.26 19-I
9.4	27-L	130 28-D
51	5-I	1,500 2-E
74	22-E	203 11-A
34	25-F	48 9-D
48	7-S	240 13-P
166	15-T	616 19-O
49	8-A	120 23-R
80	16-H	576 7-H

1	2	3	4	5	6	7	8	9	10	11	12	13	14	15	16	17	18	19	20	21	22	23	24	25	26	27	28	29
---	---	---	---	---	---	---	---	---	----	----	----	----	----	----	----	----	----	----	----	----	----	----	----	----	----	----	----	----